

P.V.G.'s

Muktangan English School & Jr. College Pune - 09
II Term Summative Written Examination (2024-25)
Standard - I **Div -**

Date : 28.03.2025

Time : 1.00 pm to 3.30 pm

Subject : Mathematics

Name : _____

Roll No. : _____

Supervisor's Sign :	Examiner's Sign. :	Marks _____ 20
---------------------	--------------------	-------------------

Q I. A] Solve.

(4)

a) T U

$$\begin{array}{r} 17 \\ + 3 \\ \hline \square \end{array}$$

b) T U

$$\begin{array}{r} 11 \\ + 5 \\ \hline \square \end{array}$$

c) T U

$$\begin{array}{r} 9 \\ - 4 \\ \hline \square \end{array}$$

d) T U

$$\begin{array}{r} 6 \\ - 6 \\ \hline \square \end{array}$$

B] Write in words.

(1)

135 - _____

Q II. A] Fill in the blanks.

(1)

a. _____ tens and 2 units =

T	U
8	2

b. 7 tens =

T	U

B] Skip counting

(1)

2, 4, _____, _____

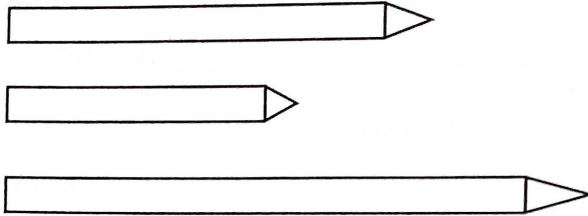
C] Complete the pattern

(1)




Q III. A] Colour the longest pencil

(1)



B] Draw two balls inside the basket and one ball outside the basket.

(1)



Q IV. A] Write the number.


(1)


a. One hundred and forty three - _____

b. Seventy six - _____

B] Count the money and write the cost of each item

(2)

a.  $\boxed{\text{₹ } 10} + \boxed{\text{₹ } 10} = \boxed{}$

b.  $\textcircled{\text{₹ } 5} + \textcircled{\text{₹ } 2} + \textcircled{\text{₹ } 2} = \boxed{}$

Q V. A] Write the number in reverse order.

(2)

77 to 74

B] Fill in the blank.

(1)

_____ comes before Friday.

Q VI. Word problems.

(4)

a. Rita had 9 balls. She gave 2 balls to Amar. How many balls left with her now?

_____		<input type="text"/>
	<input type="text"/>	<input type="text"/>
_____		<input type="text"/>

_____		<input type="text"/>

Ans. _____

b. Pinki's mother made a salad with 2 cucumbers and 4 tomatoes. How many vegetables did she use altogether?

_____		<input type="text"/>
	<input type="text"/>	<input type="text"/>
_____		<input type="text"/>

_____		<input type="text"/>

Ans. _____

