

P.V.G.'s  
**Muktangan English School & Jr. College Pune - 09**  
**II Term Summative Written Examination (2024-25)**  
**Standard - II** **Div -**

Date : 28.03.2025

Time : 1.00 pm to 3.30 pm

Subject : Mathematics

Name : \_\_\_\_\_ Roll No. : \_\_\_\_\_

Supervisor's Sign :	Examiner's Sign. :	Marks <u>    </u> 20
---------------------	--------------------	-------------------------

**Q1. Do as directed. (4)**

1.  $2 + 2 + 2 + 2 + 2 =$

$\times$    $=$

(Fill in the blanks)

2. T U

9 0 P. V. = \_\_\_\_\_

(Write the place value of the underlined number).

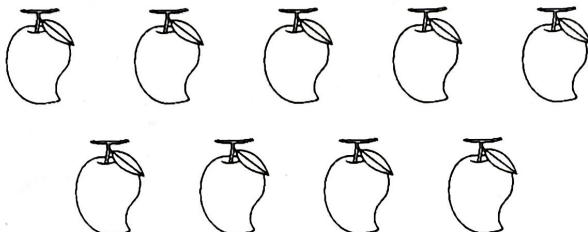
3.  $6 \times 5 =$

(Write the correct answer).

4. 115, 119, \_\_\_\_\_, \_\_\_\_\_

(Fill in the blanks by skip counting).

**Q2. Write the unit of weight (g or kg) used to measure the weight of the following. (2)**

1. 

2.



3.



4.



Q3. Solve the following

(5)

	H	T	U
		8	2
+		5	9

	T	U
	9	0
-	2	6

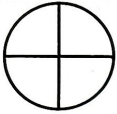
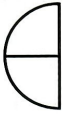

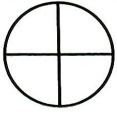
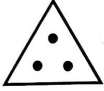
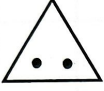
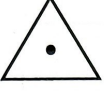

	T	U
	3	2
x		3

	H	T	U
		9	6
+		5	7

	T	U
	1	0
x		6

**Q4. Complete the following.**

**(2)**

1.						
2.						

**Q5. Study the following data and answer the questions.**

**(3)**

Sr. No.	Games	Name of the students participating
1.	Mallakhamb	Ram, Preeti, Tushar, Sahil
2.	Football	Yash, Raj
3.	Chess	Jaya, Trisha, Krishna, Ajay, Rudra
4.	Skating	Rahul, Tanvi, Priya

1. Name the game which has maximum number of students.

Ans. \_\_\_\_\_

2. Name the students who play football.

Ans. \_\_\_\_\_

3. Name the game which has 3 students in it.

Ans. \_\_\_\_\_

**Q6. Word Problems**

1. In a park there were 79 boys and 36 girls. How many children are there altogether?

H	T	U

\_\_\_\_\_

\_\_\_\_\_

\_\_\_\_\_

\_\_\_\_\_

Ans. \_\_\_\_\_

2. A shop has 80 computers. 57 computers were sold. How many computers are remaining in the shop?

H	T	U

\_\_\_\_\_

\_\_\_\_\_

\_\_\_\_\_

\_\_\_\_\_

Ans. \_\_\_\_\_

